



Solve each problem using a tape diagram.

Answers

1) A clown had 61 balloons. He gave 43 away at a party. How many balloons would he have left over?

1. \_\_\_\_\_

2) A waiter has 61 customers. If 14 left, how many customers would the waiter still have?

2. \_\_\_\_\_

3) A pet store had 52 gerbils. If they sold 24 of them, how many would they have left?

3. \_\_\_\_\_

4) A baker made 62 cakes. 18 were chocolate and the rest were vanilla. How many cakes were vanilla?

4. \_\_\_\_\_

5) A museum had 67 paintings. If they got rid of 25 of them, how many pictures would they have left?

5. \_\_\_\_\_

6) Oliver owned 52 video games for his Playstation and Xbox. 20 of the games were for Xbox. How many games does Oliver have for playstation?

6. \_\_\_\_\_

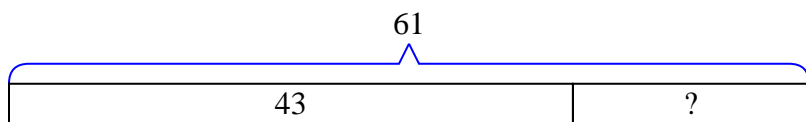
7) Tom had 88 cherries. He ate 43 of them. How many cherries does Tom have left?

7. \_\_\_\_\_

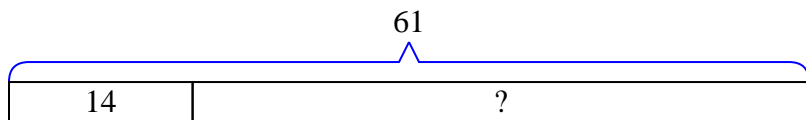


Solve each problem using a tape diagram.

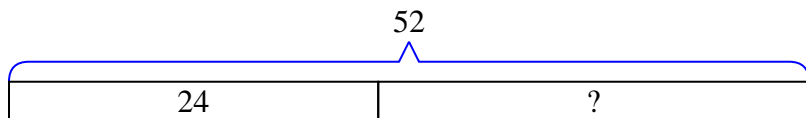
- 1) A clown had 61 balloons. He gave 43 away at a party. How many balloons would he have left over?



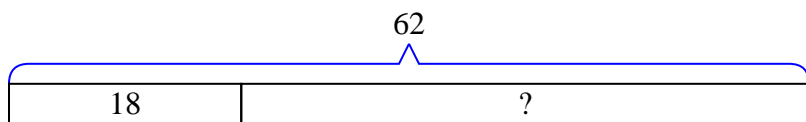
- 2) A waiter has 61 customers. If 14 left, how many customers would the waiter still have?



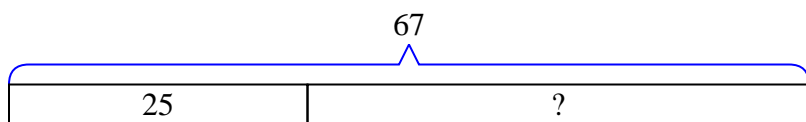
- 3) A pet store had 52 gerbils. If they sold 24 of them, how many would they have left?



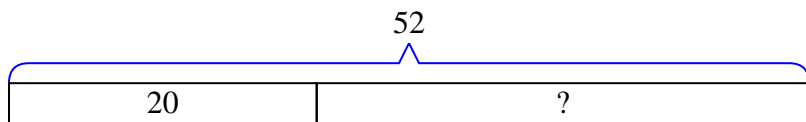
- 4) A baker made 62 cakes. 18 were chocolate and the rest were vanilla. How many cakes were vanilla?



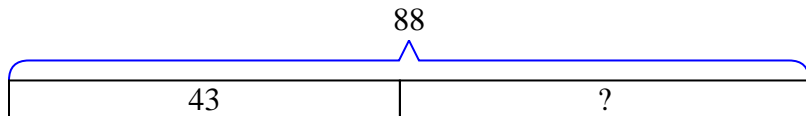
- 5) A museum had 67 paintings. If they got rid of 25 of them, how many pictures would they have left?



- 6) Oliver owned 52 video games for his Playstation and Xbox. 20 of the games were for Xbox. How many games does Oliver have for playstation?



- 7) Tom had 88 cherries. He ate 43 of them. How many cherries does Tom have left?

Answers1. **18**2. **47**3. **28**4. **44**5. **42**6. **32**7. **45**